

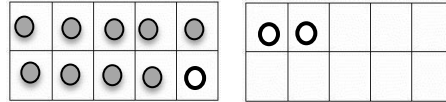
Name: \_\_\_\_\_

Date: \_\_\_\_\_

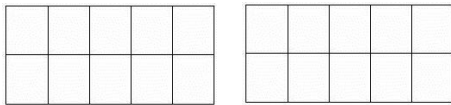
Directions:

1. Fill in the ten frames with the correct number of dots.
2. Count the dots to find the answers

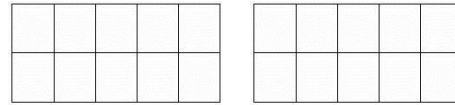
Example:  $9 + 3 = \underline{12}$




1.  $7 + 3 = \underline{\quad}$



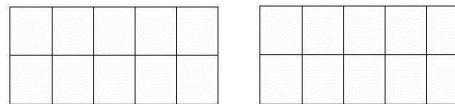
2.  $6 + 6 = \underline{\quad}$



3.  $4 + 8 = \underline{\quad}$



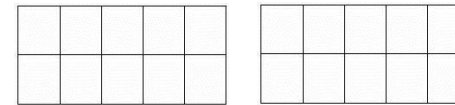
4.  $9 + 5 = \underline{\quad}$



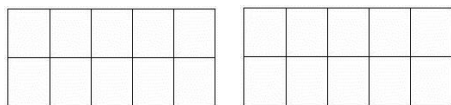
5.  $7 + 4 = \underline{\quad}$



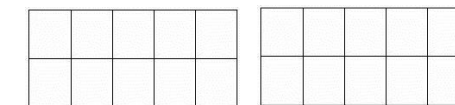
6.  $5 + 6 = \underline{\quad}$



7.  $3 + 8 = \underline{\quad}$



8.  $9 + 8 = \underline{\quad}$



\_\_\_\_ My name is on my paper.      \_\_\_\_ I checked all my answers.